

Name: _____

CHAPTER
17

Addition Stories

COMPLETE
DURING THE
WEEKS OF
MAY

Lesson 1 Writing Addition Sentences and Representing Addition Stories

Count and write.




1



plus



is
equal
to






2



plus



is
equal
to




3



plus






is
equal
to



Name: _____




Count and write.

1

 plus  is equal to 




+ =

2

 plus  is equal to 

+ =

3


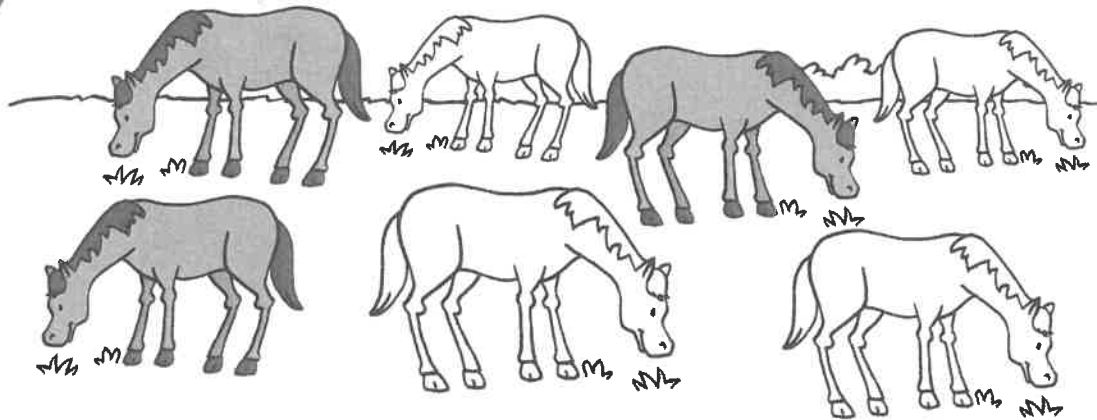
 plus  is equal to 

+ =

Name: _____

Count and write.

1




2





Name: _____


Lesson 2 Addition Facts to 5


Write.


 1 $1 + 3 = \underline{\hspace{2cm}}$.


 2 $2 + 3 = \underline{\hspace{2cm}}$.

 3 $5 + 0 = \underline{\hspace{2cm}}$.

 4 $1 + 2 = \underline{\hspace{2cm}}$.


 5 $4 + 1 = \underline{\hspace{2cm}}$.


 6 $3 + 0 = \underline{\hspace{2cm}}$.


 7 $0 + 4 = \underline{\hspace{2cm}}$.


Name: _____


 Write.


 1 $2 + 2 = \underline{\hspace{2cm}}$.


 2 $1 + 4 = \underline{\hspace{2cm}}$.

 3 $1 + 0 = \underline{\hspace{2cm}}$.

 4 $3 + 2 = \underline{\hspace{2cm}}$.

 5 $1 + 1 = \underline{\hspace{2cm}}$.

 6 $0 + 2 = \underline{\hspace{2cm}}$.

 7 $0 + 5 = \underline{\hspace{2cm}}$.